

E20-026^{Q&As}

Enterprise Storage Networking Specialist Exam

Pass EMC E20-026 Exam with 100% Guarantee

Free Download Real Questions & Answers **PDF** and **VCE** file from:

<https://www.pass2lead.com/e20-026.html>

100% Passing Guarantee
100% Money Back Assurance

Following Questions and Answers are all new published by EMC
Official Exam Center

- ⚙️ **Instant Download** After Purchase
- ⚙️ **100% Money Back** Guarantee
- ⚙️ **365 Days** Free Update
- ⚙️ **800,000+** Satisfied Customers



QUESTION 1

You have been assigned to do a study of the daily revenue effect of a pricing model of online transactions. When have you completed the analytics lifecycle?

- A. You have written documentation, and the code has been handed off to the Data Base Administrator and business operations.
- B. You have a completely developed model, and the results have shown statistically acceptable results.
- C. You have presented the results of the model to both the internal analytics team and the business owner of the project.
- D. You have a completely developed model based on both a sample of the data and the entire set of data available.

Correct Answer: A

QUESTION 2

In which lifecycle stage are initial hypotheses formed?

- A. Discovery
- B. Model planning
- C. Model building
- D. Data preparation

Correct Answer: A

QUESTION 3

What is an appropriate data visualization to use in a presentation for an analyst audience?

- A. Pie chart
- B. Area chart
- C. Stacked bar chart
- D. ROC curve

Correct Answer: D

QUESTION 4

When creating a presentation for a technical audience, what is the main objective?

- A. Show that you met the project goals
- B. Show how you met the project goals
- C. Show if the model will meet the SLA
- D. Show the technique to be used in the production environment

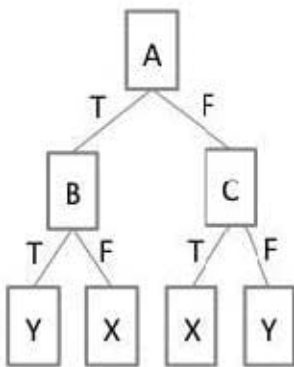
Correct Answer: B

QUESTION 5

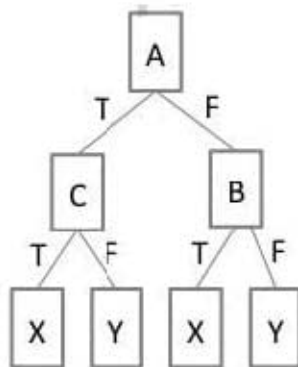
Refer to the Exhibit.

In the Exhibit, the table shows the values for the input Boolean attributes "A", "B", and "C". It also shows the values for the output attribute "class". Which decision tree is valid for the data?

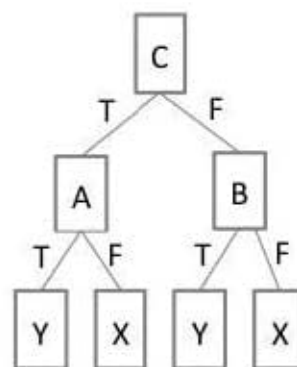
A	B	C	CLASS
T	T	T	X
T	T	F	Y
T	F	T	X
F	F	F	Y
F	T	T	X
F	F	T	Y



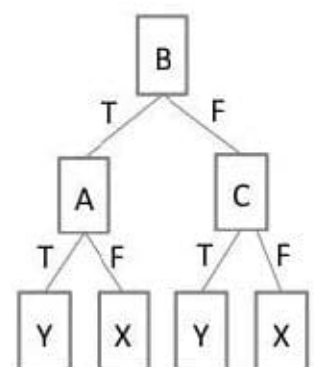
Tree A



Tree B



Tree C



Tree D

- A. Tree B
- B. Tree A

C. Tree C

D. Tree D

Correct Answer: A

[E20-026 PDF Dumps](#)

[E20-026 VCE Dumps](#)

[E20-026 Braindumps](#)