

GRE-TEST^{Q&As}

Graduate Record Examination Test: Verbal, Quantitative, Analytical Writing

Pass GRE GRE-TEST Exam with 100% Guarantee

Free Download Real Questions & Answers **PDF** and **VCE** file from:

<https://www.pass2lead.com/gre-test.html>

100% Passing Guarantee
100% Money Back Assurance

Following Questions and Answers are all new published by GRE Official Exam Center

- ⚙️ **Instant Download** After Purchase
- ⚙️ **100% Money Back** Guarantee
- ⚙️ **365 Days** Free Update
- ⚙️ **800,000+** Satisfied Customers



QUESTION 1

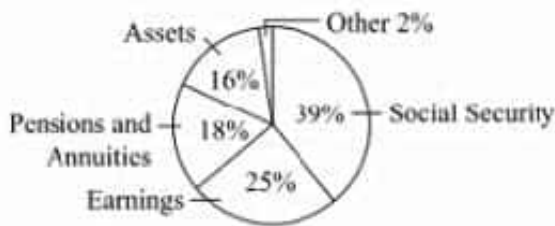
It is true that science, and more particularly scientists, _____ cherished paradigms with great reluctance and that when they do, scientific revolutions may result.

- A. unify
- B. share
- C. cede
- D. embrace
- E. dismantle
- F. relinquish

Correct Answer: CF

QUESTION 2

Exhibit.



Greg's income last year was \$45,000. The graph above shows the distribution of his income, by income source. Based on the information given, which of the following statements about his income last year are true? Indicate all such statements.

- A. His income from earnings was \$11,250.
- B. More than j of his income was from assets and earnings combined.
- C. His income from social security was 56 percent greater than his income from earnings.

Correct Answer: ABC

QUESTION 3

The movie has a surfeit of inscrutable characters and tortuous subplots, so it is no surprise that viewers leaving the recent screening appeared _____

- A. complacent

- B. phlegmatic
- C. unsated
- D. beguiled

Correct Answer: C

QUESTION 4

An exercise ball is made from soft elastic that has uniform thickness of 2 millimeters, and the interior of the ball is filled with air. The ball is in the shape of a sphere and has an exterior diameter of 65 centimeters. What is the radius of the interior of the ball, in millimeters?

- A. 323
- B. 324
- C. 325
- D. 646
- E. 648

Correct Answer: A

QUESTION 5

Exhibit.

One patient is to be randomly selected from a certain group of dental patients. The probability that the patient selected will be a male who is older than 60 years of age is $\frac{3}{25}$.

Quantity A

The probability that the patient selected will be a female who is 60 years old or younger

Quantity B

$\frac{7}{25}$

- A. Quantity A is greater.
- B. Quantity B is greater.
- C. The two quantities are equal
- D. The relationship cannot be determined from the information given.

Correct Answer: D

QUESTION 6

The relevance of the literary personality--a writer's distinctive attitudes, concerns, and artistic choices--to the analysis of a literary work is being scrutinized by various schools of contemporary criticism. Deconstructionists view the literary personality, like the writer's biographical personality, as irrelevant. The proper focus of literary analysis, they argue, is a work's intertextuality (interrelationship with other texts), subtexts (unspoken, concealed, or repressed discourses), and metatexts (self-referential aspects), not a perception of a writer's verbal and aesthetic "fingerprints." New historicists also devalue the literary personality, since, in their emphasis on a work's historical context, they credit a writer with only those insights and ideas that were generally available when the writer lived. However, to readers interested in literary detective work--say scholars of classical (Greek and Roman) literature who wish to reconstruct damaged texts or deduce a work's authorship-- the literary personality sometimes provides vital clues.

The passage is primarily concerned with

- A. discussing attitudes toward a particular focus for literary analysis
- B. describing the limitations of two contemporary approaches to literary analysis
- C. pointing out the similarities among seemingly contrasting approaches to literary analysis
- D. defending the resurgence of a particular focus for literary analysis
- E. defining a set of related terms employed in literary criticism

Correct Answer: A

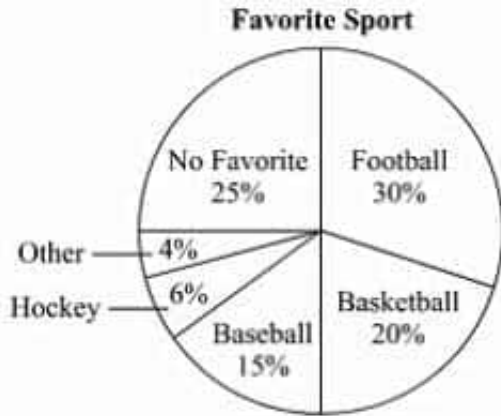
QUESTION 7

The snow-covered surface of the lake presents a reassuring illusion of _____. but beneath the snow the ice is riven with treacherous cracks.

- A. uniformity
- B. isolation
- C. seclusion
- D. protection
- E. substantially
- F. soundness

Correct Answer: AC

QUESTION 8



The circle graph above shows the results of a survey conducted at a high school in which each student was asked to name one favorite sport, if any. Of the students who named a favorite sport, what percent of students named either baseball or hockey?

- A. 15.75%
- B. 21%
- C. 28%
- D. 31.5%
- E. 42%

Correct Answer: C

QUESTION 9

In *Cleopatra: A Life*, Schitf _____ Cleopatra, stripping away the accretions of myth built up around the Egyptian queen and plucking off the imaginative embroiderings of Shakespeare and Shaw.

- A. denigrates
- B. elucidates
- C. embellishes
- D. aggrandizes
- E. demystifies
- F. manipulates


Correct Answer: AE

QUESTION 10

Population Data for Five Neighborhoods of City X, 1930 and 1990

Neighborhood	Total Population		Foreign-Born Population	
	1930	1990	1930	1990
R	228,100	217,400	91,200	66,600
S	219,100	100,700	78,700	11,700
T	102,800	150,100	20,200	25,400
U	79,700	47,300	43,100	18,200
V	5,600	9,100	1,700	4,900
Total	635,300	524,600	234,900	126,800

Percent of Foreign-Born Population in Neighborhood V by Region of Origin, 1990



- A. 6%
- B. 12%
- C. 16%
- D. 25%
- E. 29%

Correct Answer: D

QUESTION 11

In the present climate about half the atmospheric greenhouse effect comes from water vapor, about a quarter from clouds, and a fifth from carbon dioxide. According to Vallis, these numbers are necessarily) (i)_____because the effects of the greenhouse gases are not always (ii)_____. If the atmosphere is dry, then adding CO[^] makes a big difference to the greenhouse effect, but if there is a large amount of water vapor in the atmosphere already producing a greenhouse effect, then adding CO (iii)_____.

- A. exaggerated
- B. conservative
- C. approximate
- D. benign
- E. cumulative
- F. disputed
- G. poses a threat
- H. has less impact
- I. becomes more difficult

Correct Answer: AEG

QUESTION 12

Exhibit.

S is the set of all products xy such that $-4 \leq x \leq 5$ and $-3 \leq y \leq 2$.

Quantity A

The minimum value in set S

Quantity B

-8

- A. Quantity A is greater.
- B. Quantity B is greater.
- C. The two quantities are equal.
- D. The relationship cannot be determined from the information given.

Correct Answer: B

QUESTION 13

The highly dispersed nature of Panzaleo pottery throughout present-day Ecuador has led archaeologists to speculate about the pottery's origins and significance. Jijon y Caamano attributed the pottery's distribution to trade, and based on the large quantities of pottery recovered in the Ambato-Latacunga region of the central Ecuadorian highlands, he proposed that region as the probable locus of production. However, Porras suggests that inhabitants of the subtropical eastern Andean slopes, or montaria, were the original producers of Panzaleo. Ponas' theory involves the forced migration of the montaria population from their homeland in the Quijos River valley into the Ecuadorian highlands. The gradual exodus and ensuing dispersal of the makers of this ware could account for the diffuse distribution of the materials.

It can be inferred from the passage that Jijon y Caamano would probably agree with which of the following statements about the distribution of Panzaleo pottery throughout Ecuador?

- A. This distribution is not primarily the result of the relocation of the original makers of the pottery
- B. This distribution originally took place over a relatively short period of time.
- C. This distribution could not have occurred without the forced migration of certain peoples
- D. This distribution was largely limited to the Ambato-Latacunga region.
- E. This distribution indicates that the Ambato-Latacunga region was known primarily as a trading center

Correct Answer: D

QUESTION 14

The sound of disembodied human breathing in Miyazakrs films is at once a presence, close to the listener s ear. and a ghostly absence due to its lack of a visual_____.

- A. image
- B. counterpart
- C. urgency
- D. correlative
- E. cue
- F. background

Correct Answer: BD

QUESTION 15

She constantly_____herself for not living up to her own ideals--for not working hard enough, or not having motives that were pure enough.

- A. exalted
- B. coddled
- C. excoriated
- D. mollified
- E. deluded

Correct Answer: C

[GRE-TEST PDF Dumps](#)

[GRE-TEST VCE Dumps](#)

[GRE-TEST Practice Test](#)